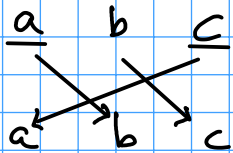
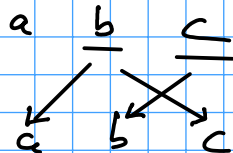
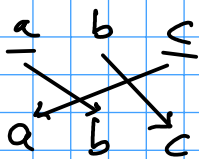


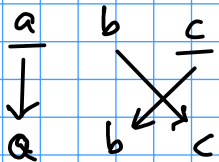
Aufgabe 7



$$\begin{aligned} t &= a \\ a &= c \\ c &= b \\ b &= t \end{aligned}$$



$$\begin{aligned} a &= b \\ b &= c \\ c &= a \end{aligned}$$



$$\begin{aligned} t &= b \\ b &= c \\ c &= t \end{aligned}$$

